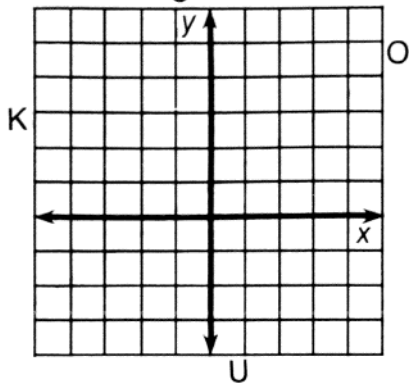


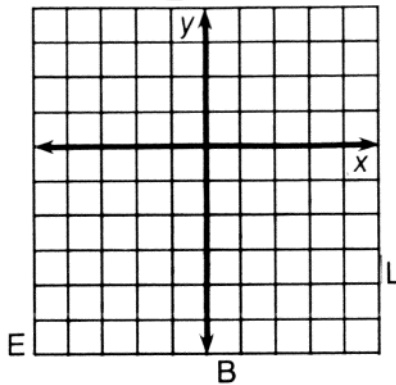
# Whom Should You See at the Bank If You Need To Borrow Money?

Use the slope and  $y$ -intercept to graph each equation below. The graph, if extended, will cross a letter. Print this letter in each box that contains the number of that exercise.

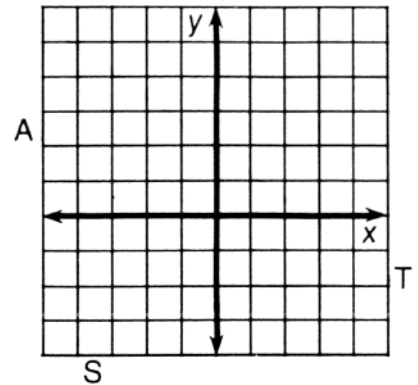
①  $y = \frac{2}{3}x + 1$



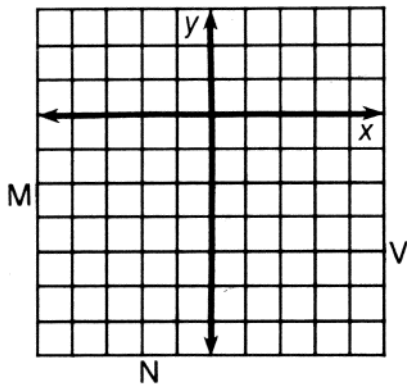
②  $y = \frac{1}{2}x - 3$



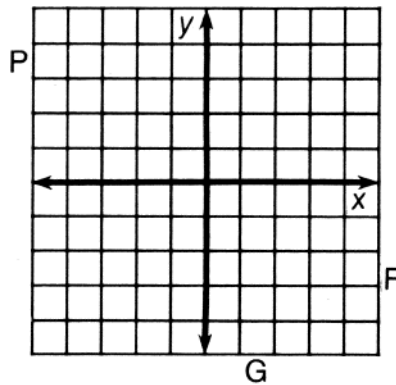
③  $y = -\frac{3}{4}x + 2$



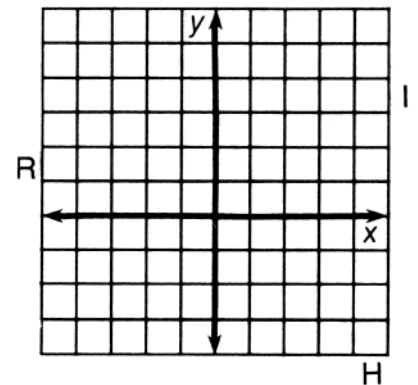
④  $y = 2x - 4$



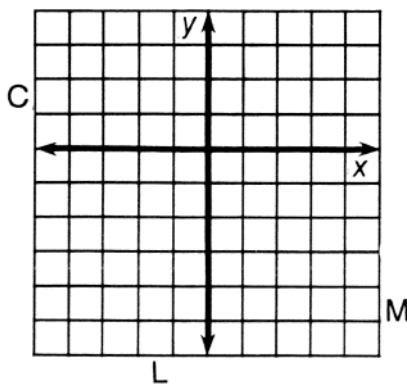
⑤  $y = -3x - 1$



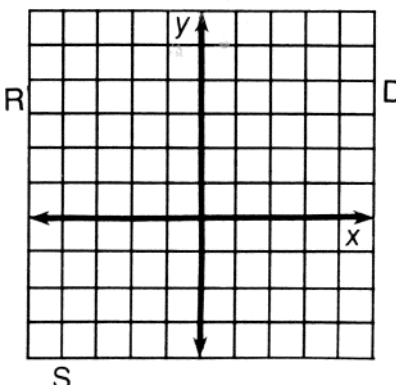
⑥  $y = -\frac{3}{2}x + 3$



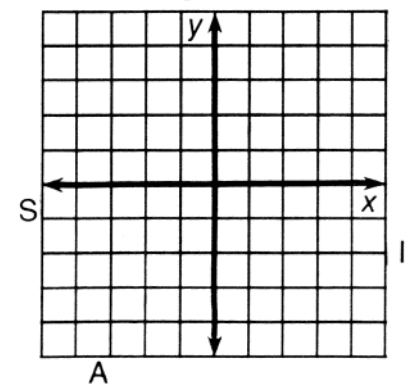
⑦  $y = 4x - 2$



⑧  $y = -\frac{1}{4}x + 2$



⑨  $y = \frac{5}{3}x$



3	6	2	7	1	9	4	9	8	8	9	4	5	2	8
---	---	---	---	---	---	---	---	---	---	---	---	---	---	---