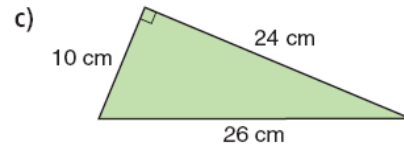
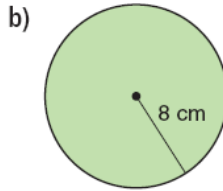
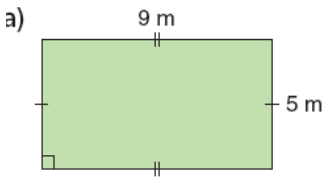
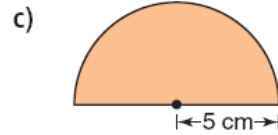
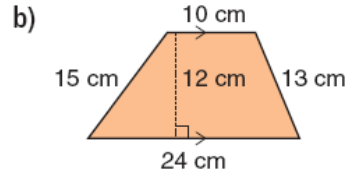
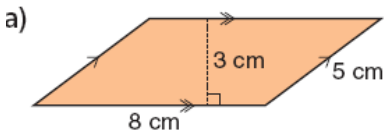


Perimeter, Area and Volume

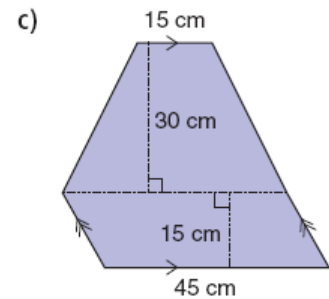
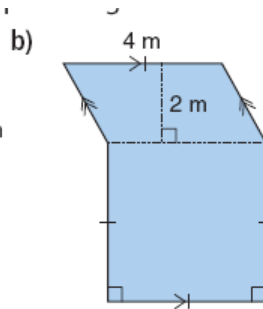
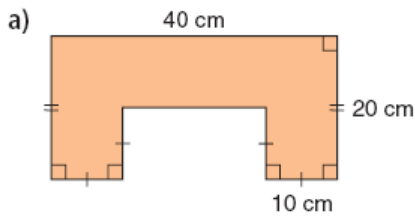
1. Determine the perimeter and area of each figure.



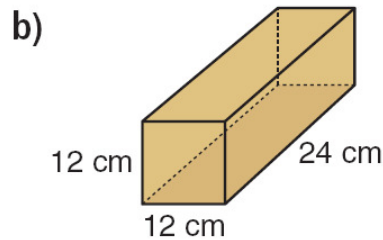
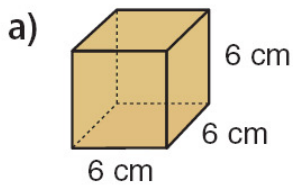
2. Determine the perimeter and area of each figure.



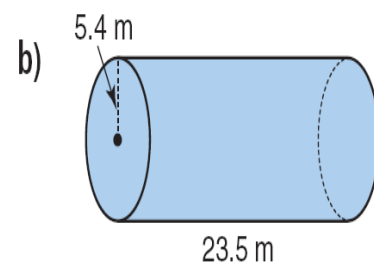
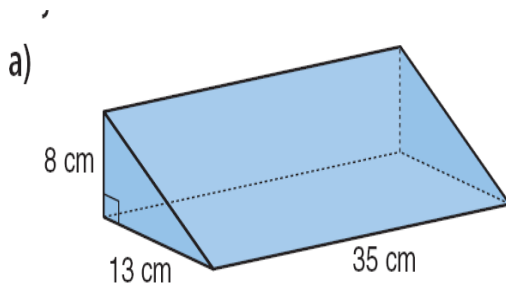
3. Determine the area of each figure.



4. Determine the surface area and the volume.



5. Determine the volume.



Answer Key:

1. a. 28 m b. 50.24 cm c. 60 cm 2. a. P = 26 cm A = 15 cm²
 b. P = 62 cm A = 204 cm² c. P = 25.7 cm A = 39.25 cm²
 3. a. 600 cm² b. 24m² c. 1575 cm² 4 a. SA = 216 cm² V = 216 cm³
 b. SA = 1440 cm² V = 3456 cm³ 5 a. 1820 cm³ b. 2151.72 m³